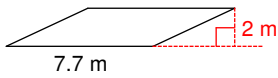


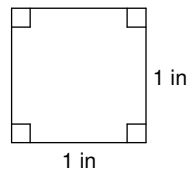
Area of Squares, Rectangles, and Parallelograms

Find the area of each.

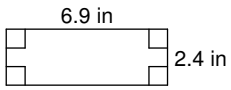
1)



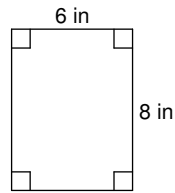
2)



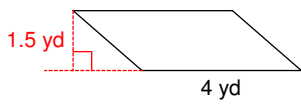
3)



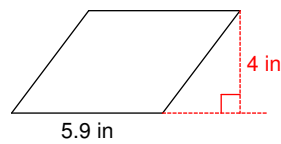
4)



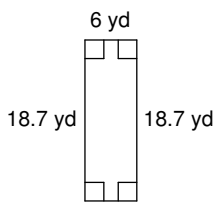
5)



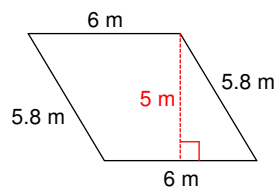
6)



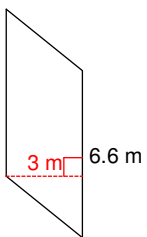
7)



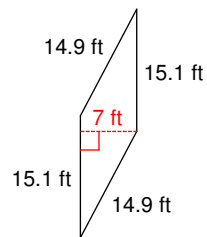
8)



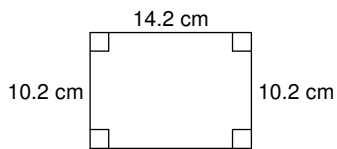
9)



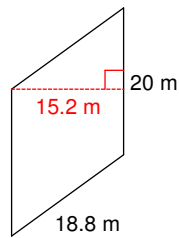
10)



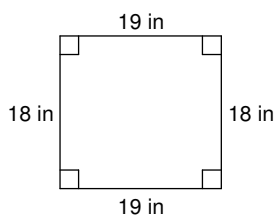
11)



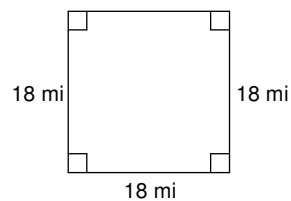
12)



13)



14)



Area of Squares, Rectangles, and Parallelograms

Find the area of each.

